



**DAV PUBLIC SCHOOL
PATLIPUTRA
COLONY
PATNA**


**WINTER BREAK
HOLIDAY
HOMEWORK**

**NAME -
CLASS -
SCHOOL -**







Happy




Sad




Tall



Short




Opposites— Soft and Hard



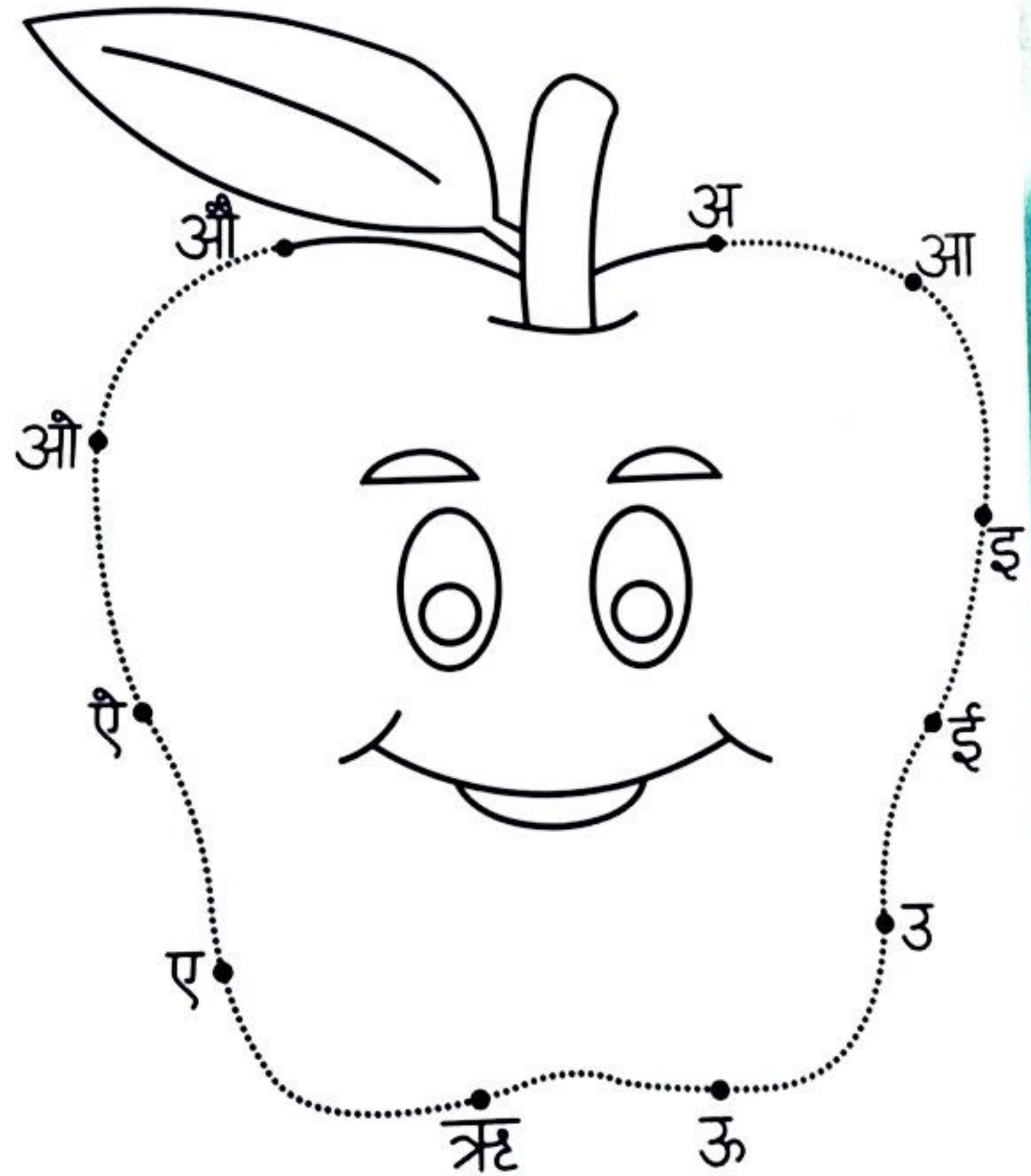


UP

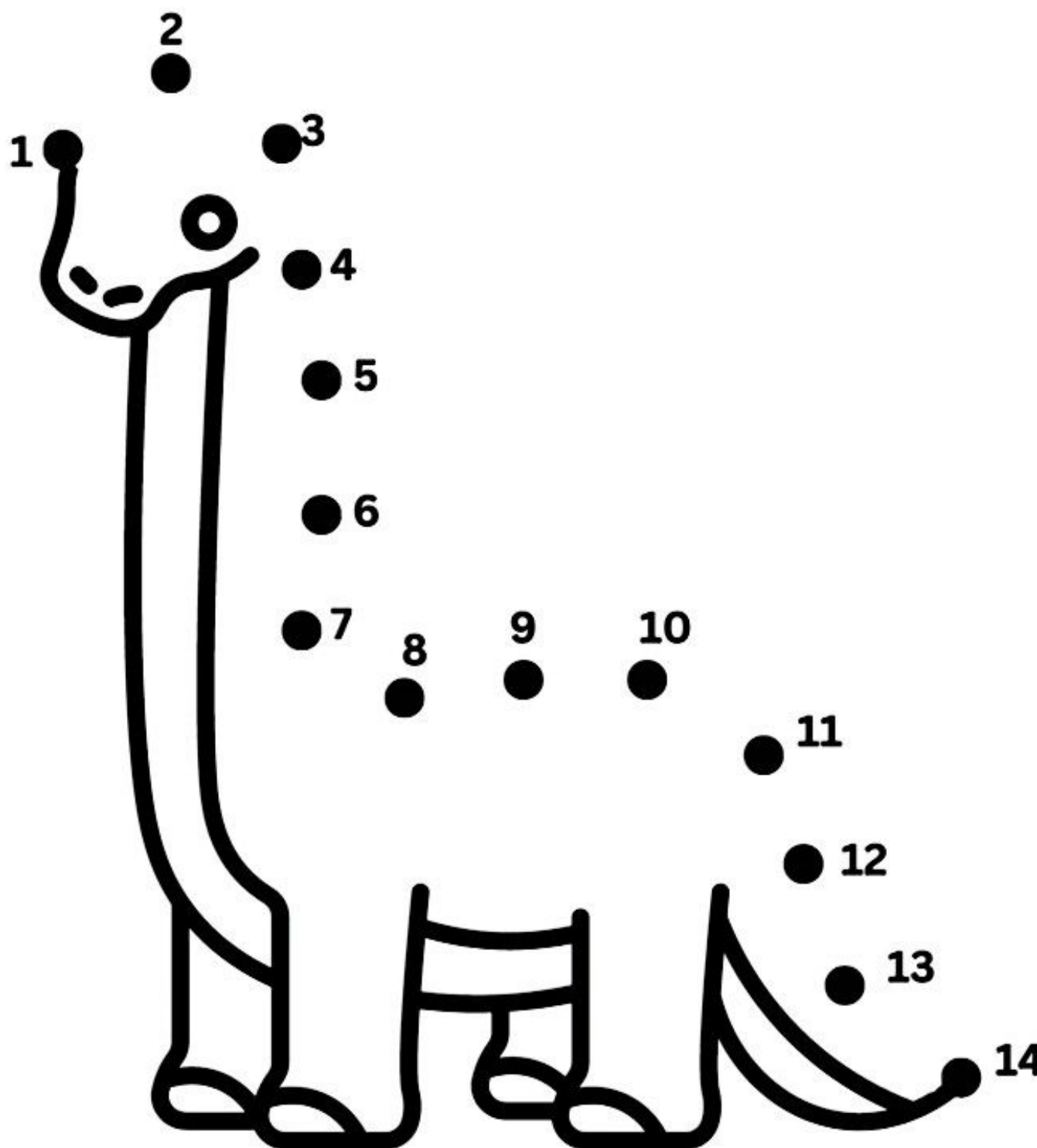

DOWN




अ से औ तक बिंदुओं को जोड़ें व चित्र पूरा करके रंग भरें।




EASY CONNECT THE DOTS AND COLOR




Light



Heavy



My Colorful Frog!



1- green

4- red




2- yellow

5- blue

3- purple

6- orange

area.





DAV PUBLIC SCHOOL
Patliputra Colony


Winter Vacation

Holiday Homework

LKG

Name: _____

Roll no.: _____



Name: _____

Roll no.: _____



Months of the Year

Trace:

January

February

March

April

May

June

July

August

September

October

November



December



How many months are in a year?

Days of the Week



Sunday



Monday



Tuesday



Wednesday



Thursday




Friday




Saturday


Handwriting Practice




grapes




apple



strawberry



avocado

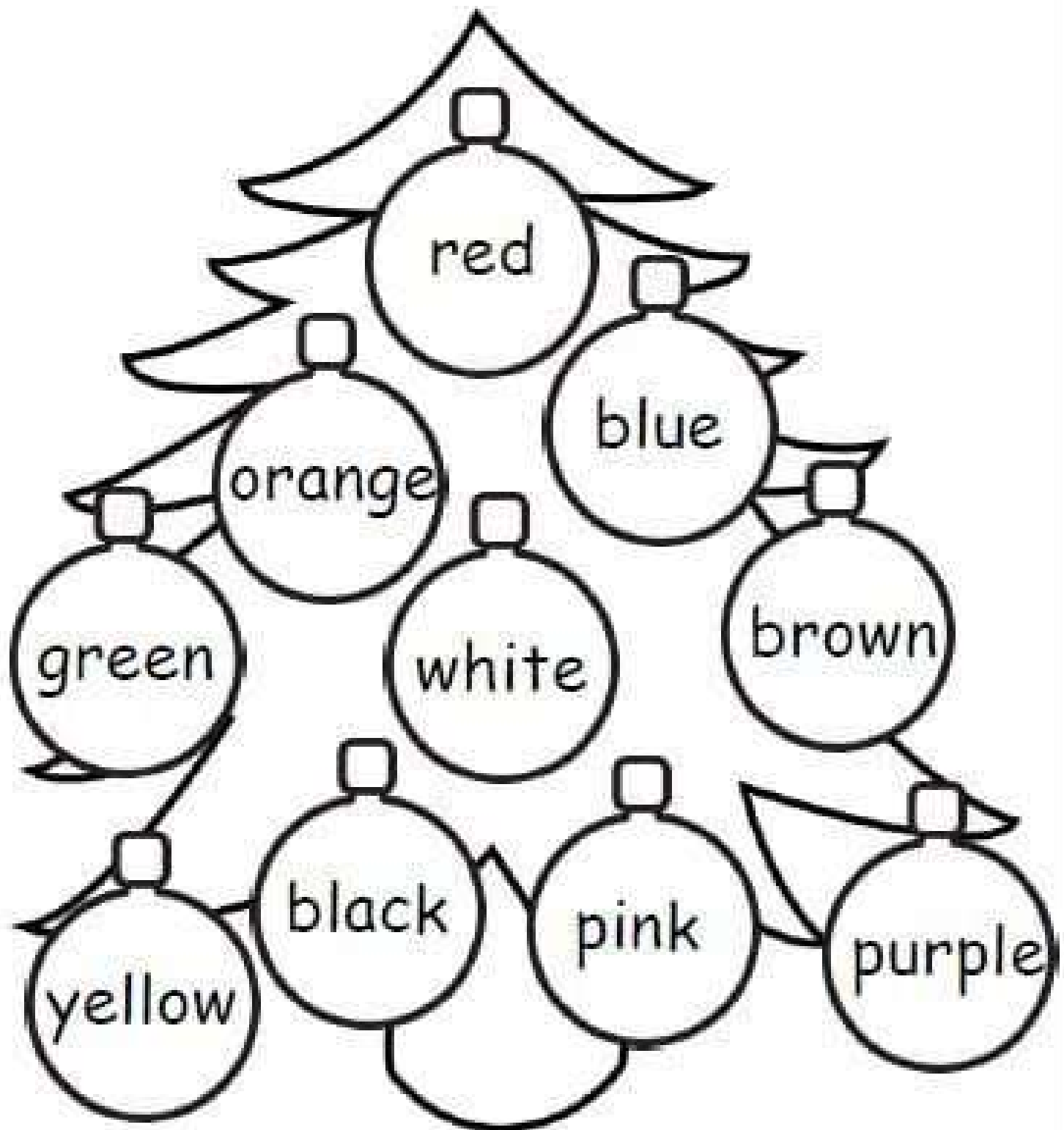


cherries


Name _____

HOLIDAY COLORS


Read the color words. Color the ornaments that color.




Fast




Slow



Light



Heavy



Read.




This is a pen.

The pen is green.

Look at the green pen.

The green pen is big.



This is a pencil.

The pencil is green.

Look at the green pencil.

The green pencil is big.




This is a pizza.

The pizza is green.

Look at the green pizza.

The green pizza is big.

Read.



This is a cat.

The cat is orange.

Look at the orange cat.

The orange cat is big.



This is a car.

The car is orange.

Look at the orange car.

The orange car is big.

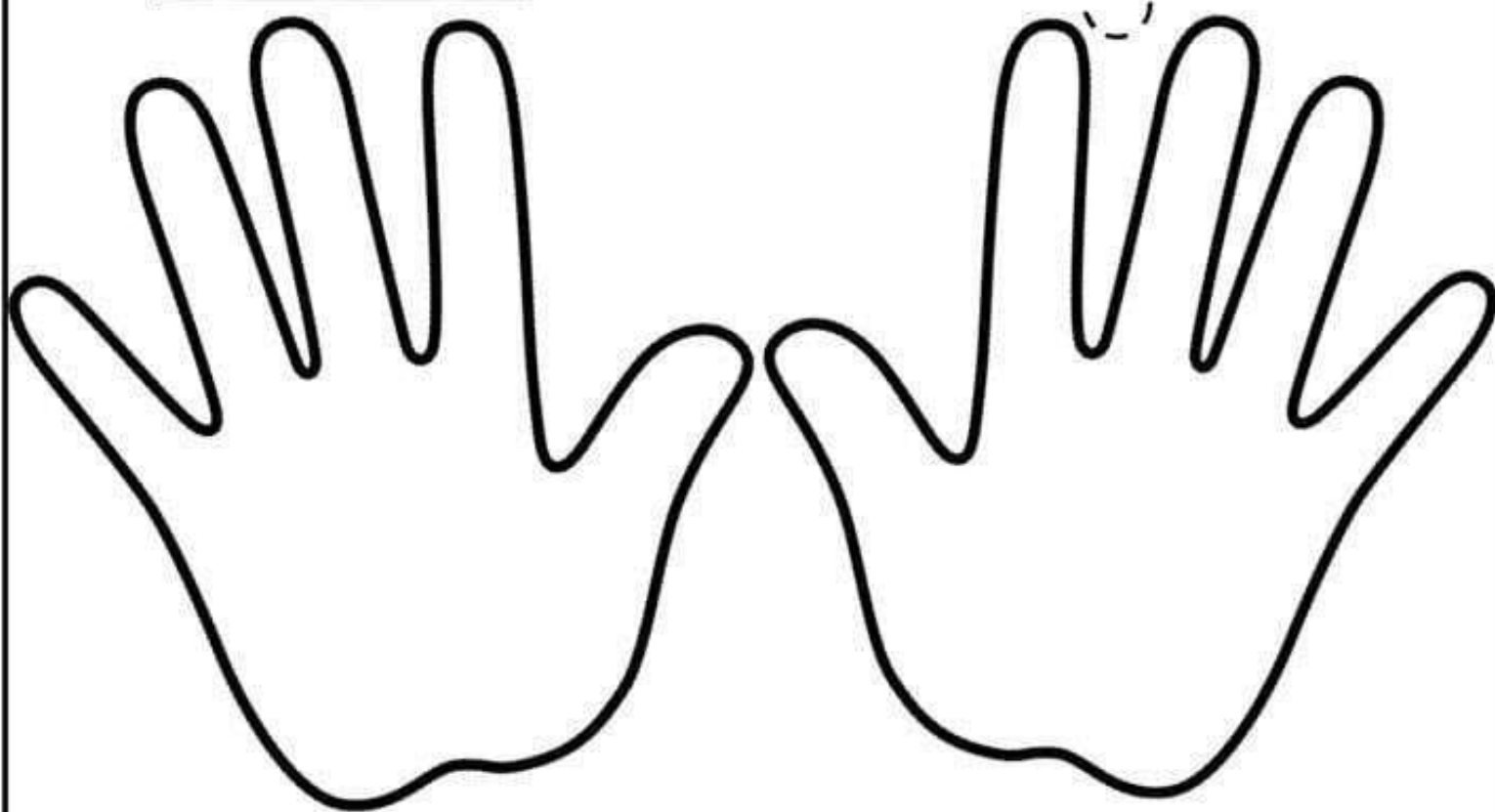
Name: _____

Left and Right

Directions: Listen to your teacher and follow the directions.

left

right



I Can Follow Directions

Draw fingernails on your **left** hand. Color the fingernails blue.
Draw fingernails on your **right** hand. Color the fingernails green.

Draw a ring on the **right** hand.

Color the **left** hand pink.



Color the **right** hand red.



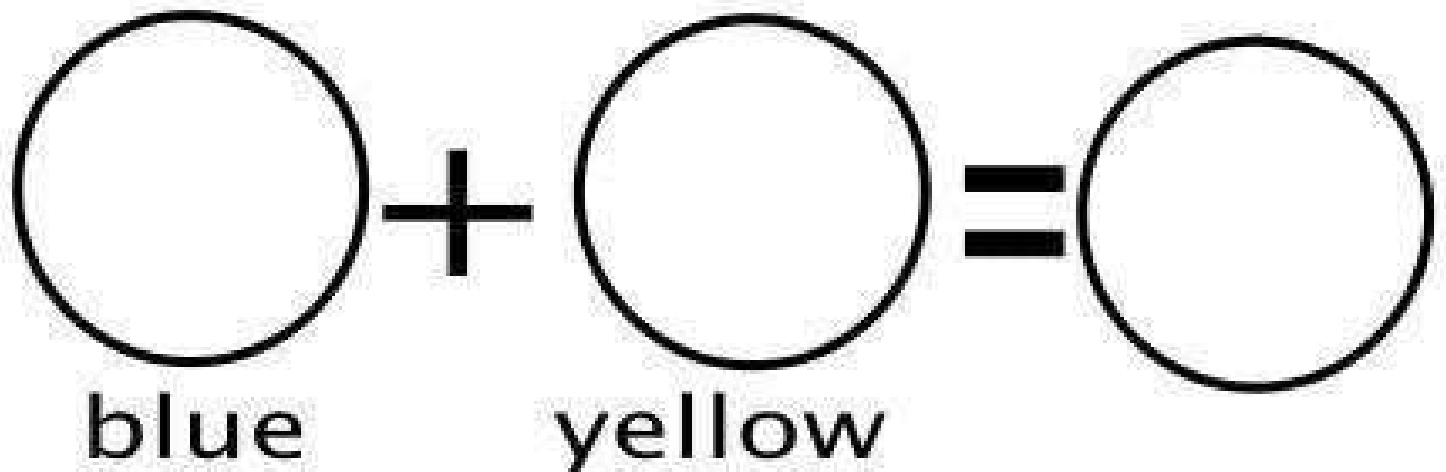
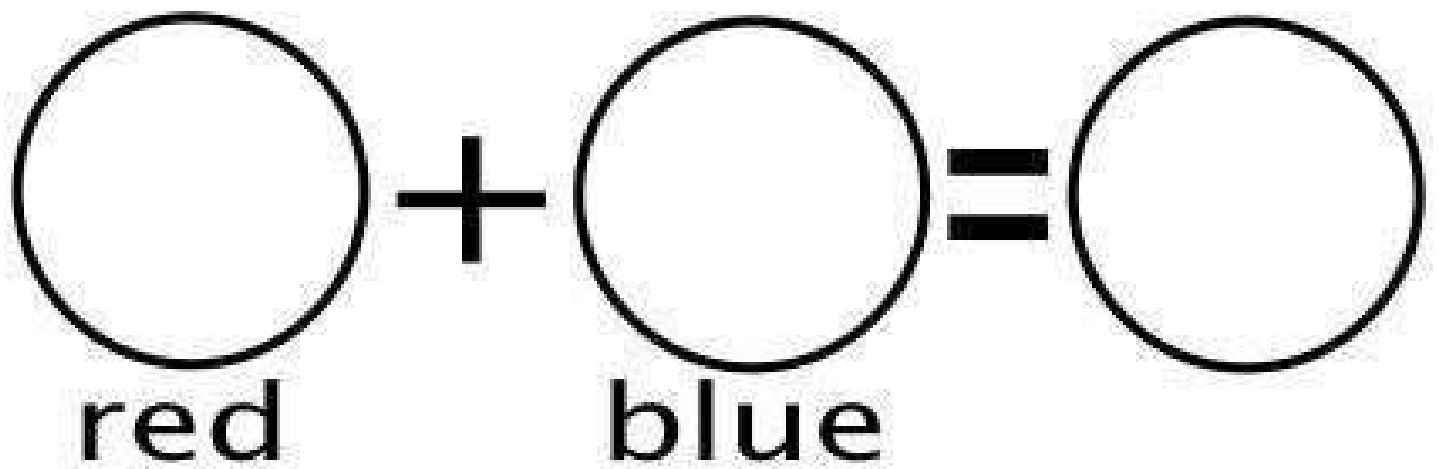
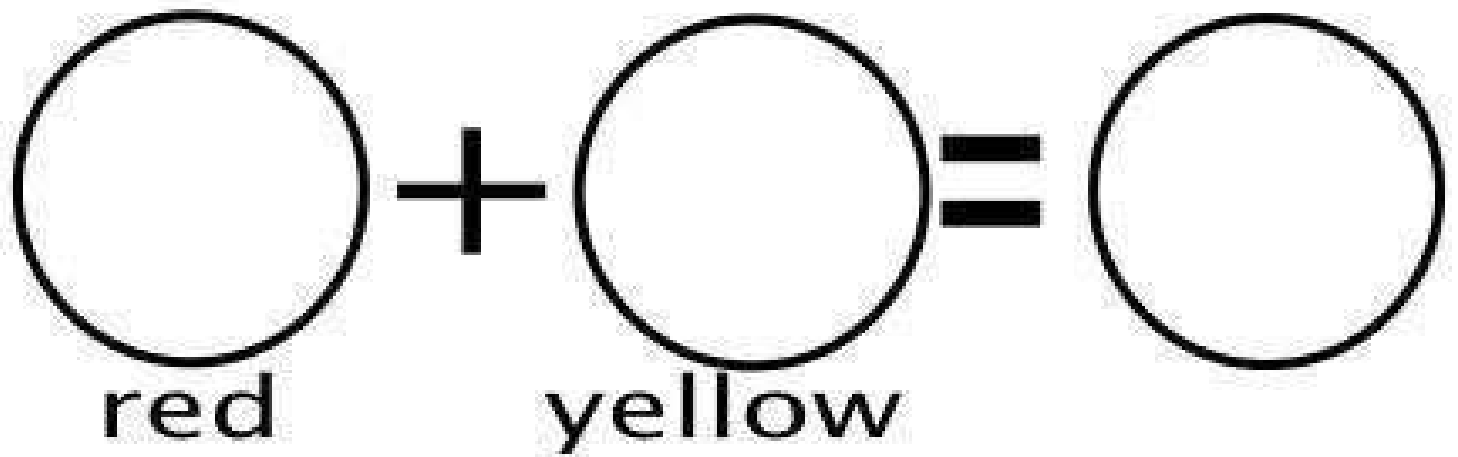
Name: _____

BROWN

Color all the pictures brown.



Color Mixing!



Write your information below.



First name

Last name

I am

--	--

years old.

Circle the month of
your birthday.

January	July
February	August
March	September
April	October
May	November
June	December

Circle the day of your birthday.

1	2	3	4	5	6	7
8	9	10	11	12	13	14
15	16	17	18	19	20	21
22	23	24	25	26	27	28
29	30	31				

Write your birthday.

month

--	--

day

Name: _____

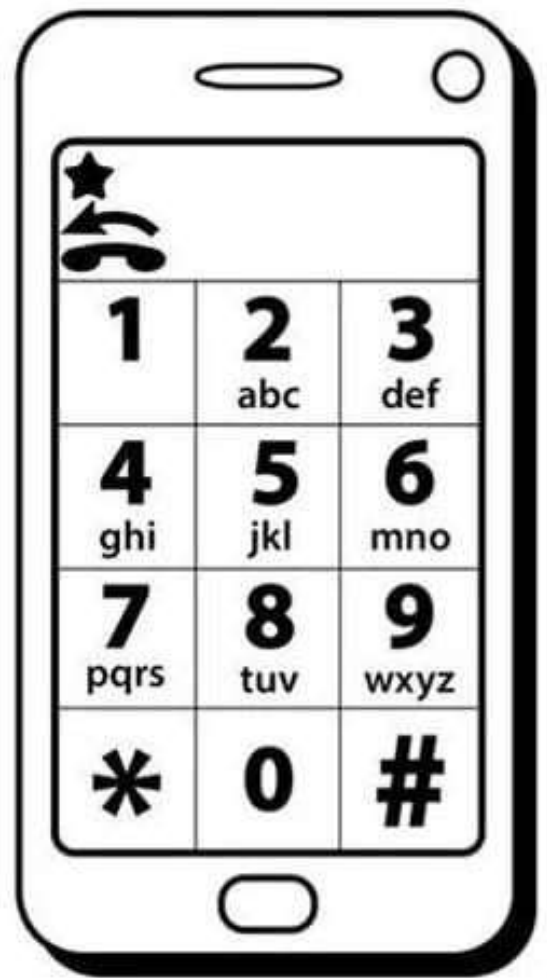
I Know My Phone Number

Directions: Write the numbers for your phone number in the boxes.

Color the numbers in your phone number on both phones and complete the sentence.

			-				-				
--	--	--	---	--	--	--	---	--	--	--	--

Practice dialing your
phone number by
pressing the keys.

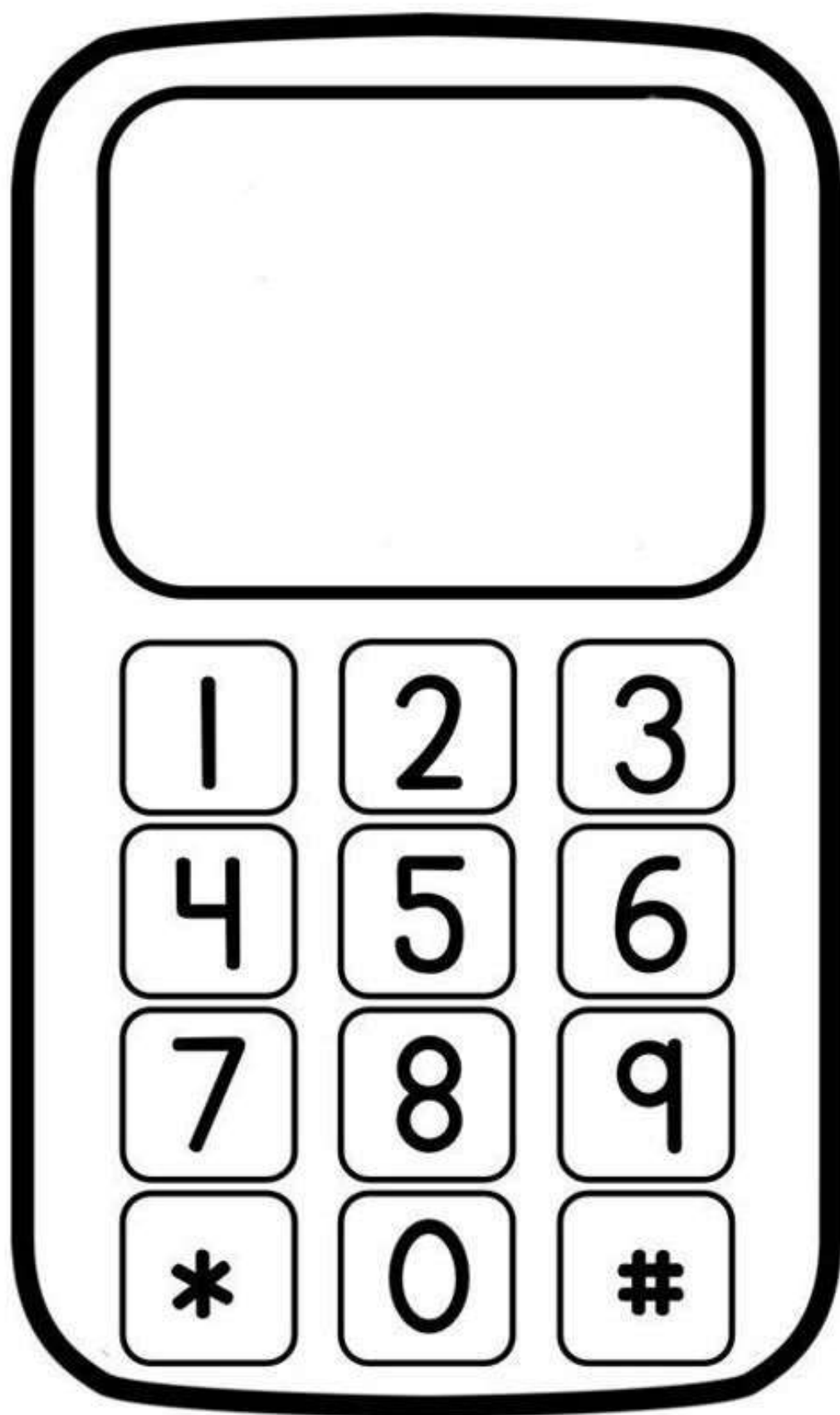


Trace and complete the sentence.


My phone number _____

is _____







WITH MY HAND I CAN FEEL.....




Rough




Smooth




Scratchy



Crinkly

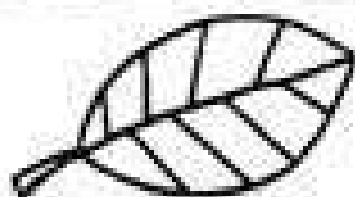
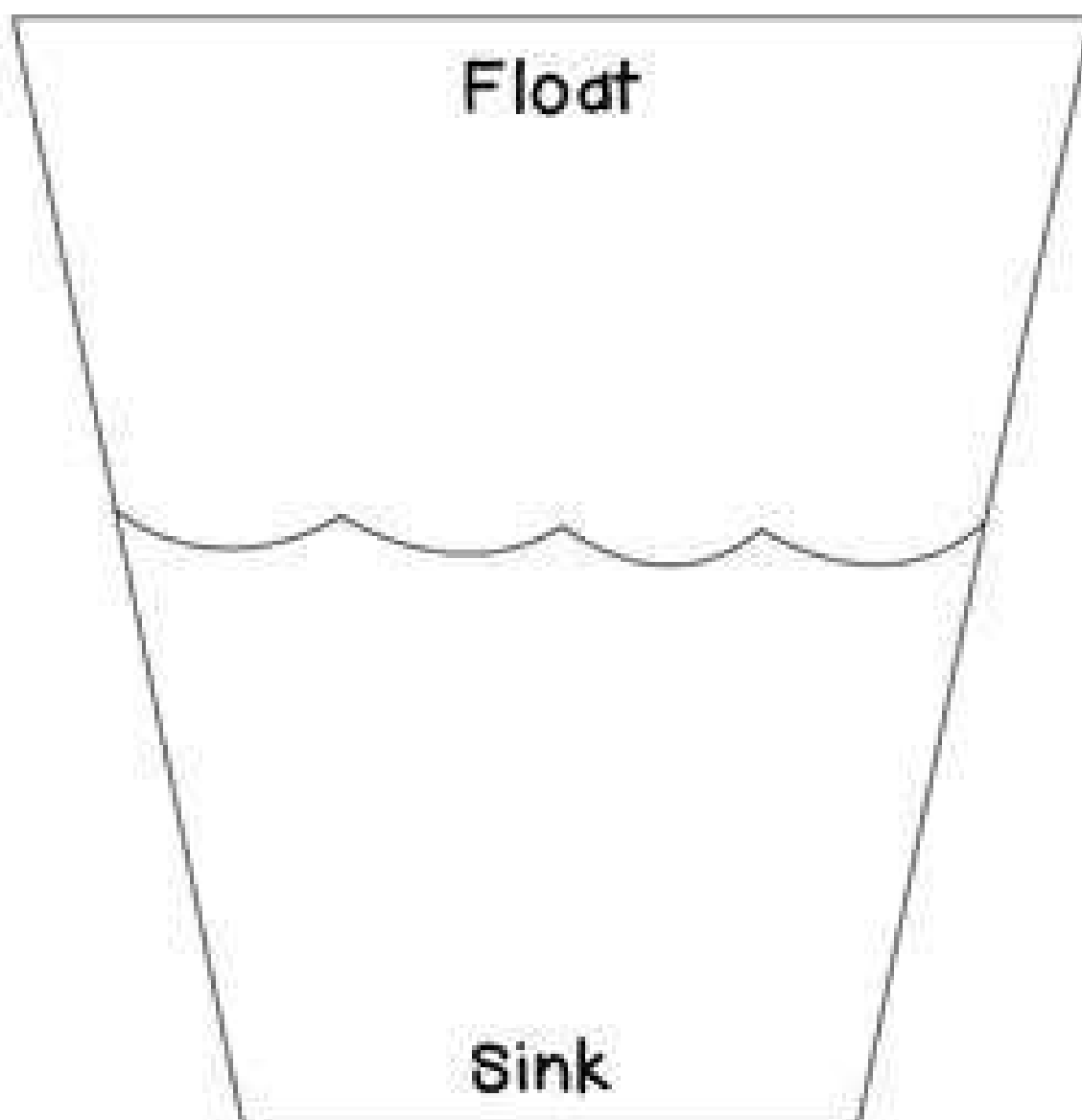


Fluffy



Sticky

Name: _____




leaf



coin



key



straw



paper tube



rock



I CAN write my

NAME

with a pencil

Three horizontal lines for handwriting practice: a solid top line, a dashed middle line, and a solid bottom line.

with a crayon

Three horizontal lines for handwriting practice: a solid top line, a dashed middle line, and a solid bottom line.

with a marker

Three horizontal lines for handwriting practice: a solid top line, a dashed middle line, and a solid bottom line.

in different colors

Three horizontal lines for handwriting practice: a solid top line, a dashed middle line, and a solid bottom line.

Name :

Date :

Never Play With...



MATCHES



STOVE

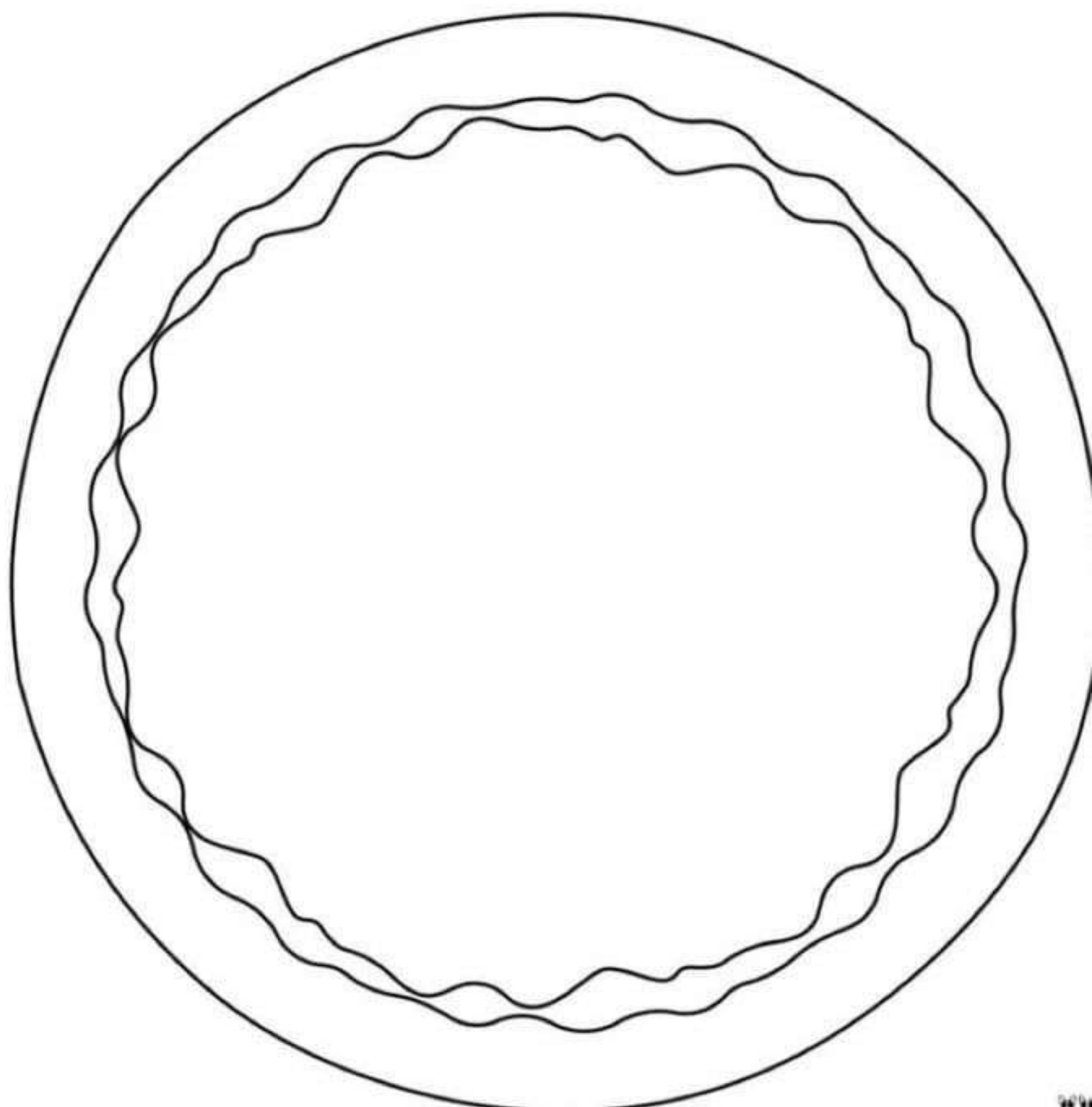


IRON




TOASTERS

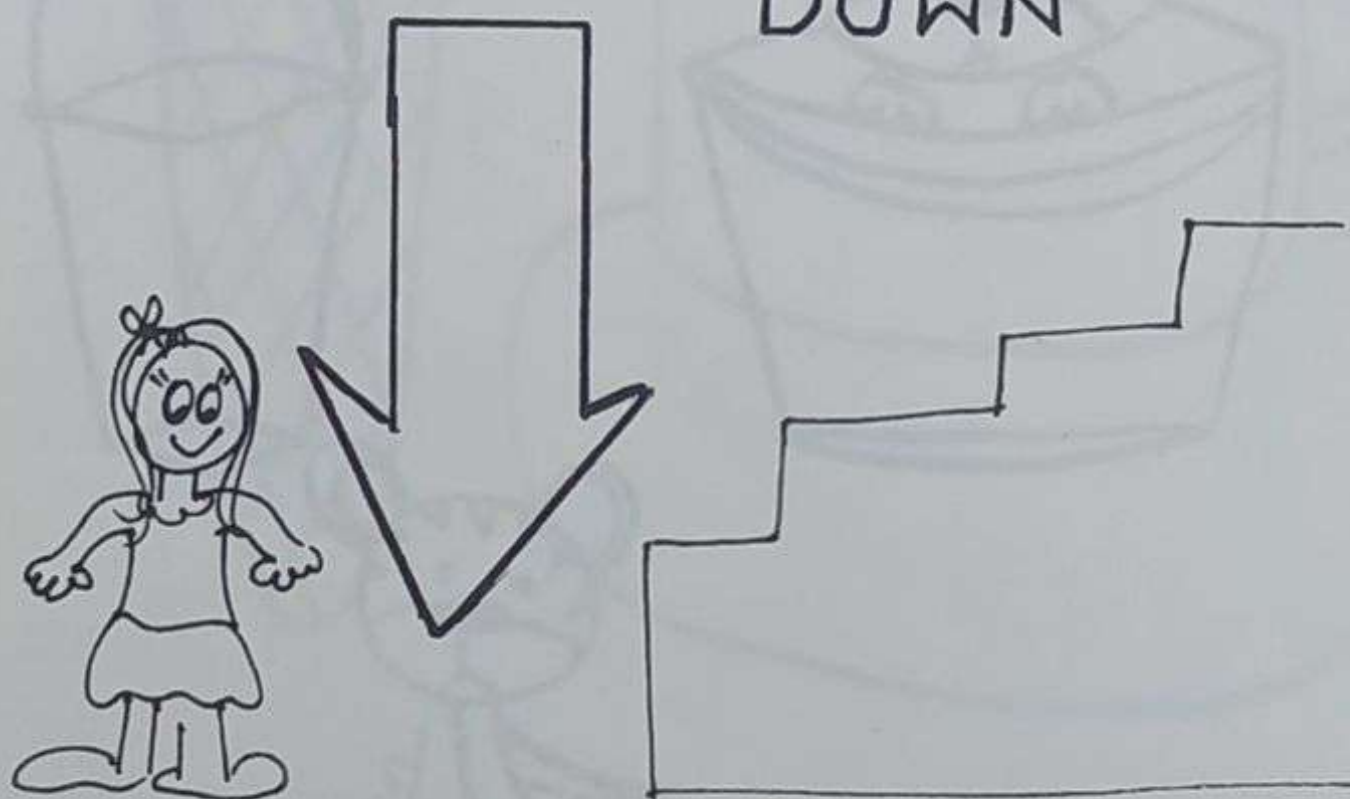
Decorate Your Own Pizza!



UP

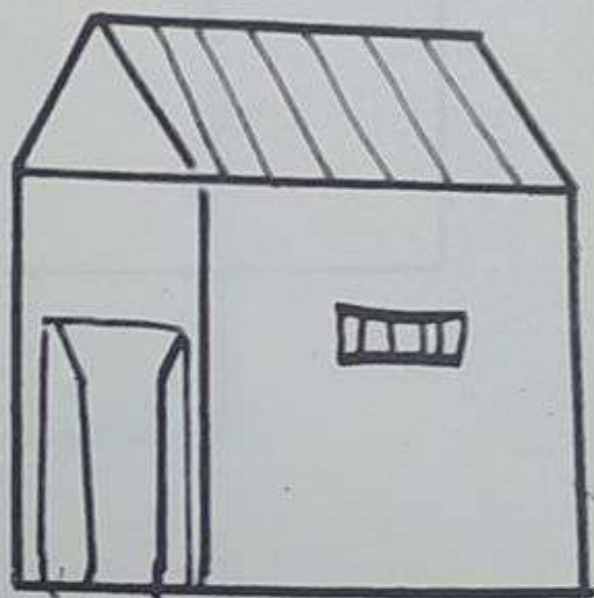
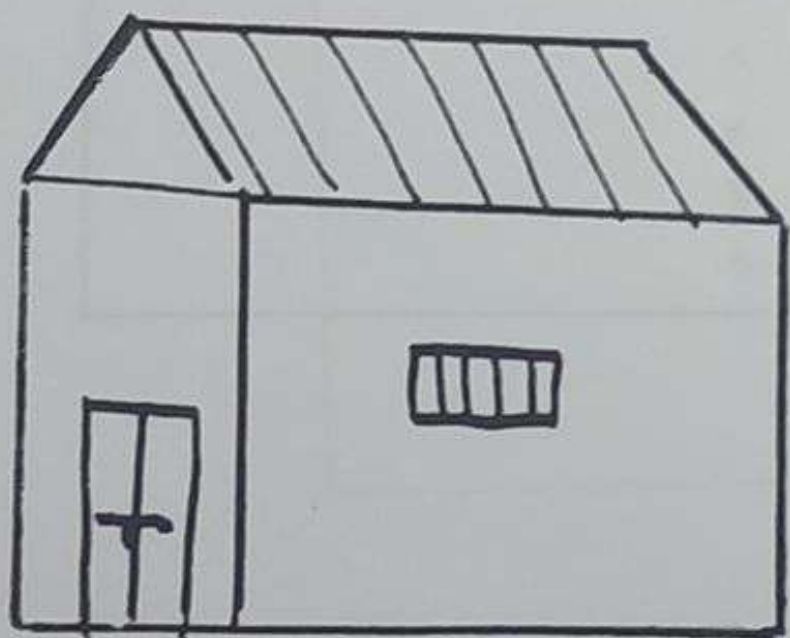


DOWN



OPEN

CLOSE





DAV PUBLIC SCHOOL
PATLIPUTRA COLONY
PATNA

Winter_Break_HHW

Name:- _____

Class:- _____

School:- _____



Sort it out.

- (Hot and Cold)

Hot

Cold



READ THE STORY, THEN SELECT THE CORRECT ANSWER.

The van

I can see the van.

The cat is in the van.

The cat had a nap in the van.



1

I can see the _____.

car

van

tree

2

In the van is a _____.

cat

pan

pat

3

The cat had a _____.

hat

nap

bee

दिए गए विकल्पों की सहायता से शब्द बनाइए।


1	2	3	4	5	6	7	8
रा	त	ला	म	हा	बा	थ	श



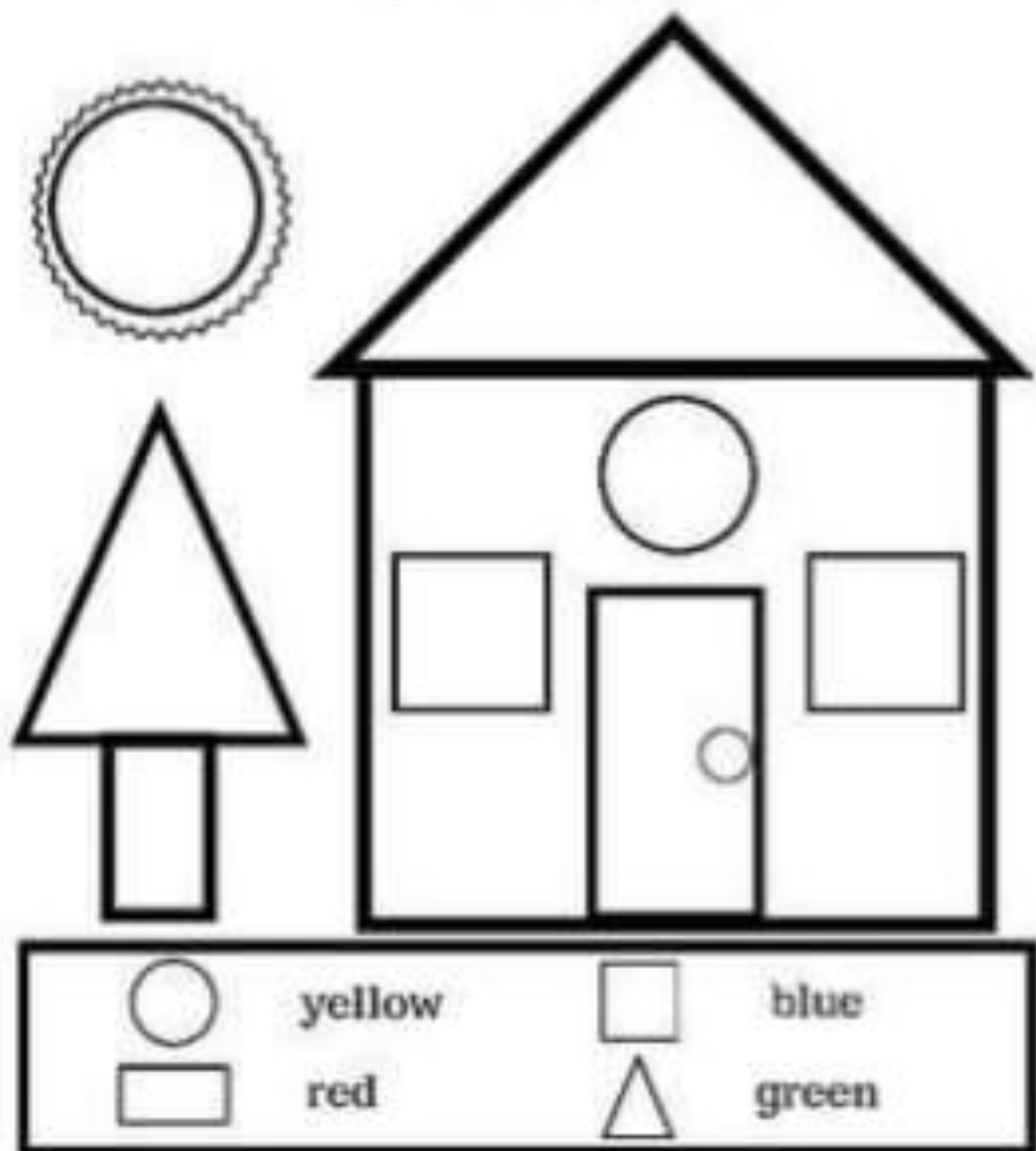
My New Years Goals

Name: _____

2025



Make a model of house 🏠 with these shapes by using colourful paper.



WINTER. HOLIDAY HOMEWORK

CLASS 1

NAME _____

CLASS _____. SEC _____

ART & CRAFT ACTIVITY :

1. **Make a models by using Aluminium Foil.**
2. **Draw different types of objects using geometrical shapes :**
like birds, animals, fruits, flowers and make its composition
3. **Make a Christmas and New year Cards using cotton and ear buds.**
4. **Create a short poem related to Winter Season.**
5. **Make a model of Rabbit 🐰 using Tissue paper.**

DAV PUBLIC SCHOOL
Patliputra Colony

Winter Break
Holiday Home work

Name-_____

Class - 2_____

Roll no.-_____



WINTER HOLIDAY HOMEWORK – CLASS 2


Name: _____

Class: II Section: ____

1. My Winter Diary

Write 5 simple sentences about your winter holidays.

(You may write about food, games, family time, or habits.)

 Draw a picture related to winter .

2. Art & Craft Activity:-

Make any one winter craft using waste material.

(Example: Snowman / Woollen cap / Winter tree)

3. Reading Time

Read and learn one short moral story.

- Compose a short poem on winter or new year.
- Make a Happy New year card.
- Revise tables from *2 to 15*

 Do all the given worksheet.

SELF INTRODUCTION

 1. What is your name?


 My name is _____.

 2. How old are you?

 I am _____ years old.

 3. In which class do you study?

 I study in Class _____.

 4. How many members are there in your family?

 There are _____ members in my family.

 5. What is your favourite colour?


 My favourite colour is _____.

 6. What is your favourite toy / game?

 My favourite toy / game is _____.

 7. What is your favourite subject?

 My favourite subject is _____.

 8. What do you want to become when you grow up?

 I want to become a _____.

 9. One good habit of yours:

 I always _____.

 10. Say a polite sentence:

 Thank you / Please / Sorry



मेरा परिचय

1. मेरा नाम _____ है।
2. मैं _____ में रहता हूँ।
3. मैं _____ साल का हूँ।
4. मेरे स्कूल का नाम डी. ए. वी.
पब्लिक स्कूल है।
5. मैं _____ कक्षा में पढ़ता हूँ।
6. मेरी माता का नाम _____ है।
7. मेरे पिता का नाम _____ है।



Cursive Writing Practice

Aa Bb Cc Dd Ee Ff Gg

Hh Ii Jj Kk Ll Mm Nn

Oo Pp Qq Rr Ss Tt Uu

Vv Ww Xx Yy Zz

DAV PUBLIC SCHOOL, PATLIPUTRA COLONY, PATNA-13

Holiday Home Work -2025-26

Class - III

WINTER BREAK

English

Q. 1 .Answer the following questions:-

- (a) When was the hot air balloon made? Who made it?**
- (b) Why did Michael not want to take help from others?**
- (c) How was Poppy's wish fulfilled?**
- (d) Why did Peter call his pet 'the birthday kitten?**
- (e) What happened when the poor farmer touched the gold plate?**

Q. 2. Write a paragraph on 'The birthday gift' that you received.

Q. 3. Write a letter to your friend to spend a week in Summer vacation.

Q. 4. Fill in the blanks with 'a' 'an' 'the'.

- (1) Nishu reads__ interesting story yesterday.**
- (2) Prashant is one of __ best students in the class.**
- (3) Vinay has __ uncle who is __ doctor.**

	<p>(4) Would you like to eat __ apple or __ banana?</p> <p>(5) My grandma narrated me __ story.</p> <p>Q. 5. Rearrange the following words to make proper statements -</p> <p>(1) many/he/saw/countries/places/and</p> <p>(2) there/saw/he/a/penguin</p> <p>(3) the/tallest/girl/in/the/class/is/Sheetal</p> <p>(4) crow/was/ the/ surprised/see/to/it</p> <p>(5) Reema/very/performed/well/exams/in/her</p>
Hindi	<p>नीचे दिए गए अपठित गद्यांश को पढ़कर प्रश्नों के उत्तर दीजिए –</p> <p>रामू एक मेहनती लड़का है। वह रोज़ सुबह जल्दी उठता है। स्कूल जाने से पहले वह अपने माता-पिता की मदद करता है। उसे पढ़ना और खेलना बहुत पसंद है। उसके शिक्षक उसे बहुत प्यार करते हैं।</p> <p>1. प्रश्न : रामू कैसा लड़का है?</p> <p>2. प्रश्न : रामू सुबह क्या करता है?</p> <p>3. प्रश्न : रामू को क्या पसंद है?</p> <p>4. प्रश्न : रामू की मदद कौन करता है?</p> <p>5. सही (✓) या गलत (X) लिखिए –</p>

(क) रामू को पढ़ना पसंद नहीं है।

(ख) रामू को कोई मदद नहीं करता है।

2. विशेषण तथा उसके भेद दो-दो उदाहरण के साथ लिखें।

3. विलोम शब्द लिखें।

(क) अंधकार -

(ख) मेहनत -

(ग) परिश्रम -

(घ) दुनिया -

प्रश्न 4. विशेषण पहचानिए।

(क) घोड़ा तेज दौड़ता है -

(ख) बारिश होने पर बच्चे खुश थे -

प्रश्न 5. पर्यायवाची शब्द लिखिए।

(क) पानी -

(ख) सूरज -

(ग) पृथ्वी -

प्रश्न 6. अनेक शब्दों के लिए एक शब्द लिखिए।

(क) जो पढ़ता हो -

(ख) जो लिखता हो -

(ग) जो खेलता हो -

प्रश्न 7. मुहावरों के अर्थ लिखिए।

(क) आँखों का तारा -

(ख) नाक कटना -

(ग) हाथ खड़े करना -

प्रश्न 8. युग्म शब्द लिखे।

(क) जल्दी -

(ख) हरा -

प्रश्न 9. अनेकार्थी शब्द लिखिए।

(क) कल -

(ख) हार

MATHS

Q1. Sum of the following fractions:

a)

$$\frac{2}{6} + \frac{3}{6} = \text{—}$$

b)

$$\frac{1}{4} + \frac{2}{4} = \text{—}$$

c)

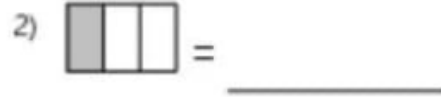
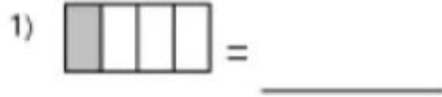
$$\frac{1}{8} + \frac{6}{8} = \text{—}$$

d)

$$\frac{5}{10} + \frac{2}{10} = \text{—}$$

Identify Fractions

Identify the fractions.



Q2. Add:

- a) 79 km 685 m and 35 km 214 m
- b) 86 kg 267 g and 95 kg 789 g

Q3. Subtract:

- a) 634 kg 750 g from 786 kg 984 g
- b) 176 L 760 mL from 398 L 985 mL

Q4. From a book fair, Arun purchased three books costing ₹15.50, ₹26.50 and ₹5.50.

If he pays ₹50, how much balance will he get back?

Q5. Divide:

- a) $756 \div 7$
- b) $342 \div 6$
- c) $28 \div 7$
- d) $764 \div 4$
- e) $508 \div 8$

SCIENCE

Class 3

Chapter Food, Water, and Eating and Cooking Habits:

MCQs (5)

1. What is the main source of energy for our body?

- a) Water**
- b) Food**
- c) Air**
- d) Sleep**

2. Which of the following is a healthy eating habit?

- a) Eating only sweets**
- b) Eating fruits and vegetables daily**
- c) Eating only at night**
- d) Not eating breakfast.**

3. Which part of the plant is often eaten as food?

- a) Root**
- b) Stem**
- c) Leaf**
- d) All of the above**

4. What should we do before eating food?

- a) Wash our hands**
- b) Play outside**
- c) Watch TV**
- d) Sleep**

5. Which of the following is a good source of water?

- a) River**
- b) Pond**
- c) Tap**
- d) All of the above**

Fill in the Blanks (5)

	<p>1. We should drink _____ glasses of water every day.</p> <p>2. Fruits and vegetables are rich in _____</p> <p>3. We should _____our hands before eating food.</p> <p>4. A balanced diet includes a variety of _____</p> <p>5. We get water from _____</p> <p>Short questions answers:-</p> <p>(1) Write the Name of two plants and two animals food</p> <p>(2) Write any five uses of water.</p> <p>(3) Why do we cook food?</p> <p>(4) Write any five methods of cooking.</p> <p>(5) Name any five sources of water.</p>
SOCIAL SCIENCE	<p>1)Who invented the first aeroplane.</p> <p>(a)Graham Bell (b) right brothers (c) Thomas Edison.</p> <p>2) which is the most expensive mode of transport.</p> <p>(a) railway (B) waterways (c) Airways</p> <p>3) Which means of transport uses animal energy.</p> <p>(a)tram (b)Submarine (c)Tonga</p> <p>4) An instrumental to know direction</p> <p>(a) Compass (b)scale (c)protector</p> <p>5) what help us to reach the our destination without getting lost?</p> <p>(a)watch (b)direction (c)calendar.</p>

Fill In the blanks.

1 The hand of compass always point towards_____

2. The sun rises in the morning in the _____

3. _____travel is not as costly as a travel.

4.Do not use a _____ If you have to go to closely place.

5 North direction is opposite to _____

Answer the questions

1)Why is it important to know direction?

2)Why do people migrate?

Draw a compass

DAV PUBLIC SCHOOL, PATLIPUTRA COLONY, PATNA-13

Holiday Home Work -2025-26

Class - IV

WINTER BREAK

ENGLISH

Q.1 Write synonyms of the given words:

a. Difficult

b. Cried

c. far

d. Torn

e. Arrived

f. hear

Q.2 Write the antonyms of the given words:

a. Giant

b. Ugly

c. young

d. Late

e. Weary

f. polite

Q.3 Answer the following questions:

a. How did the artist laugh after the lady had left the studio?

b. Why was the emperor sad and worried?

c. How was the artist rewarded for his cleverness?

d. What kind of life did the princess lead with the beggar?

e. What prompted Bubble to come and check his cake in the kitchen?

Q.4 Write a paragraph on 'India of my Dream'.

Q.5 Write an application to the Principal asking for leave on account of illness.

	<p>Q.6 Rearrange them to form meaningful sentences:</p> <p>a. making / Shiela / card / a beautiful /</p> <p>b. by / gills / breathe / means of / fish</p> <p>c. shoes / a cobbler / us / for / makes</p> <p>d. fly / penguins / some birds / kiwis / like / cannot / and</p>
HINDI	<p>प्रश्नों के उत्तर लिखें:</p> <p>प्रश्न: होलिका को क्या वरदान मिला हुआ था ? क्या उसका वरदान काम आया?</p> <p>प्रश्न: ब्रज की होली की क्या विशेषता है?</p> <p>प्रश्न : पन्ना को कौन सी चिंता सता रही थी?</p> <p>प्रश्न: स्वाति को क्यों पुरस्कार दिया गया?</p> <p>2. युग्म शब्द लिखे</p> <p>जूड़ो-</p> <p>सभा-</p> <p>आज-</p> <p>पढ़ाई-</p> <p>3. नीचे दिए गए त्योहारों से संबंधित उनके राज्य के नाम लिखें</p> <p>- वैशाखी</p> <p>- गणेश चतुर्थी</p> <p>- ओणम</p> <p>- पोंगल</p> <p>- दुर्गा पूजा</p> <p>4. नुक्ता लगे कोई पांच शब्द लिखें</p> <p>5. दिए गए वाक्य किसने किस कहे :</p> <p>* सुंदर चित्र बना दूँ बैठ जाइए</p> <p>* कलम कागज तो ले जा</p> <p>* अब मुंह आप उधर तो करिए</p>

6. इसे आप क्या सीखेंगे

- फूलों से
- कोयल से
- चींटियां से
- नदी से

7. नीचे दिए गए शब्दों के दो दो पर्यायवाची शब्द लिखे

- वायु
- पुष्प
- मेघ
- बारिश

MATHS

Question 1: Change these improper fractions into mixed numbers

(a) $\frac{7}{3}$

(b) $\frac{7}{5}$

(c) $\frac{5}{2}$

(d) $\frac{8}{7}$

(e) $\frac{5}{3}$

Q2. Change into improper fraction:

(a) $2\frac{1}{5}$

(b) $3\frac{1}{2}$

(c) $1\frac{3}{4}$

Q3. Find the missing number:

1. $\frac{1}{\square}$ $\frac{4}{8}$	2. $\frac{1}{7}$ $\frac{\square}{21}$	3. $\frac{1}{2}$ $\frac{5}{\square}$
4. $\frac{3}{4}$ $\frac{9}{\square}$	5. $\frac{1}{3}$ $\frac{5}{\square}$	6. $\frac{4}{\square}$ $\frac{16}{24}$

Q4. Word Problem

Tina ran around a rectangular garden of length 12 metres and breadth 8 metres.

Meena ran around a square field of side 11 metres.

Who covered more distance and by how much?

****Q5. Construct angles of the following measures.**

Label the angles and name them.**

a) 120°

b) 75°

c) 90°

d) 135°

e) 60°

SCIENCE

Class 5 from the chapters Safe Handling and Shortage of Water, and Food and Water Pollution:

MCQs (5)

1. What is the main cause of water shortage?

- a) Overuse of water**
- b) Saving water**
- c) Rainwater harvesting**
- d) Water pollution**

2. Which of the following is a way to conserve water?

- a) Turning off the tap while brushing**
- b) Leaving the tap open**
- c) Washing clothes daily**
- d) Using more water for gardening.**

3. What is water pollution?

- a) Using water for drinking**
- b) Contaminating water with harmful substances**
- c) Saving water for future**
- d) Building dams**

4. Which of the following is a source of food pollution?

- a) Using pesticides in farms**
- b) Eating healthy food**
- c) Drinking clean water**
- d) Exercising daily**

5. How can we prevent food pollution?

- a) By washing fruits and vegetables**
- b) By eating junk food**
- c) By storing food in open**

	<p>d) By not cooking food properly</p> <p>*Fill in the Blanks (5)*</p> <p>1. We should _____ water to avoid shortage.</p> <p>2. _____ is a major cause of water pollution.</p> <p>3. We should wash our hands before _____ food.</p> <p>4. Food pollution can cause _____ to humans.</p> <p>5. Rainwater harvesting helps in _____ water.</p> <p>*Short Questions (5)*</p> <p>1. Why is it important to conserve water?</p> <p>2. Name two ways to prevent water pollution.</p> <p>3. What is food pollution?</p> <p>4. How can we handle food safely?</p> <p>5. What are the effects of water pollution on humans?</p>
<p>SOCIAL SCIENCE</p>	<p>I. Tick the correct option:-</p> <p>1. Eden Garden is in----</p> <p>(a) Kolkata (b) Bengaluru (c) Mumbai</p> <p>2. A sketch gives us a-----</p> <p>(a) Rough idea (b) Complete idea (c) No idea</p> <p>3. The highest mountain peak of South India is ----</p> <p>(a) Anai Mudi (b) Nilgiri (c) Himalayas</p> <p>4. The most popular means of transport on the hills its-----</p>

(a) Horse (b) Camel (c) Mute

5. We can get money order through a -----

(a) Post office (b) Bank (c) Airport

II. Fill in the blanks:-

1. India is located in the continent of -----.

2. Computer is an ----- device.

3. ----- is called a farmer's friend.

4. Periyar Tiger Reserve is in-----.

5. It is important to learn the ----- of a map.

III. Answer the following questions:-

1. Mention the names of any three traditional games of India.

2. Differentiate between a map and a sketch.

3. Name two factors that help us to select the mode of transport.

4. Write two main advantages of a satellite.

5. What do you mean by Wildlife tourism in India?

DAV PUBLIC SCHOOL, PATLIPUTRA COLONY, PATNA-13

Holiday Home Work -2025-26

Class - V

WINTER BREAK

ENGLISH

1.Choose the correct modal from the brackets.

a)You _____ finish your homework before playing. (must / might)

b)_____ I drink some water, please? (May / Must)

c)She _____ speak English very well. (can / should)

d)We _____ be late today because of rain. (might / must)

e)You _____ respect your elders. (should / could)

2.Change the tense as directed

a)She plays in the garden.(Change into Past PerfectTense)

b)They watched a movie.(Change into Present Tense)

c)I go to school every day.(Change into Future Tense)

d)He writes a letter.(Change into Past Perfect Tense)

e) We cleaned the room.(Change into Future Tense)

Fill in the blanks with the Reflexive and Emphasising pronoun.

- a) I did the work all by _____.
- b) He fixed the car _____.
- c) We will complete the project _____.
- d) She herself cooked the meal _____.
- e) You should do it _____ not someone else.

Writing Section

1. Write a paragraph on Importance of Tree and Computer.

2. Write an application to Principal asking leave of five days on account of illness .

Answer these questions.

1. How did the five chums know that the threat to Mrs Stephanie came by phone?

2. Write any two advantages of E-mail?

3. What are the causes of global warming?

4. Which place did the Neha and Sachin called filthy and Why?

5. Why does the poet want everyone to plant a seed?

HINDI

1. तीन दिनों की छुट्टी के लिए प्राचार्या को एक आवेदन पत्र लिखें।
2. दिए गए शब्दों के पर्यायवाची शब्द लिखें।
क. माता ख. तालाब
ग. नदी घ. पुत्र
3. दिए गए शब्दों के वचन बदले।
क. कुर्सी
ख. पत्ता
ग. कली
घ. बच्चे
4. दिए गए शब्दों के लिंग बदले।
क. पंडित
ख. पिता
ग. चूहा
घ. कवि
5. दिए गए मुहावरों के अर्थ लिखें।
क. नौ दो ग्यारह होना।
ख. मन में लड़झ फूटना।
ग. घी के दिए जलाना।
6. इनके विलोम शब्द लिखिए:
(क) लायक
(ख) गुण
(ग) सुना
(घ) आकाश
7. निम्नलिखित प्रश्नों के उत्तर लिखिए
(क) चांद ने माता से किस चीज के लिए जिद की?
(ख) खड़गसिंह सिंह बाबा भारती के पास क्यों आया था?
(ग) बाबा भारती ने खड़क सिंह से क्या प्रार्थना की?
(घ) कैसे व्यक्ति की कभी हार नहीं हो सकती?
(ङ) महंत ने गोवर्धन दास की जान कैसे बचाई?

MATHS

1. Simplify:

$$(i) 1\frac{2}{3} + 2\frac{1}{2} + \frac{3}{4}$$

$$(ii) 3\frac{2}{9} + 2\frac{1}{3} + 2\frac{7}{12}$$

$$(iii) \frac{7}{12} + \frac{8}{9} - \frac{5}{6}$$

$$(iv) 1\frac{3}{25} + \frac{7}{20} - \frac{2}{5}$$

2. Find the average:

$$1) \{10, 4\}$$

$$2) \{14, 10, 12\}$$

$$3) \{2, 10, 3\}$$

$$4) \{8, 10\}$$

3. Three dozen oranges were sold for rs 120. If there was a loss of rs 9, find the cost price of one dozen orange.

4. In a class of 45 students, 60% are boys. Find the numbers of boys in the class.

5. A farmer borrowed rs. 2400 at 12% interest per annum. At the end of three years, he repaid rs 1200 and a cow

	<p>for the balance amount. Find the cost of the cow.</p> <p>6. The sum of two angles of a triangle is 90° . Find the third angle. What type of triangle is this?</p>
SCIENCE	<p>Class 5</p> <p>Questions for class 5 from the chapters Air, Fuels, and Our Solar System:</p> <p>*Fill in the Blanks (5)*</p> <ol style="list-style-type: none"> 1. The Earth's atmosphere is made up of _____ gases. 2. _____ is a type of fuel that is used to power vehicles. 3. The Sun is the center of our _____. 4. The layer of gases surrounding the Earth is called the _____. 5. _____ is a process that uses fuel to produce energy. <p>*MCQs (5)*</p> <ol style="list-style-type: none"> 1. What is the main component of air? <ol style="list-style-type: none"> a) Oxygen b) Nitrogen c) Carbon dioxide d) Helium 2. Which of the following is a renewable fuel? <ol style="list-style-type: none"> a) Coal b) Petrol c) Solar energy d) Diesel 3. How many planets are in our Solar System? <ol style="list-style-type: none"> a) 7 b) 8 c) 9 d) 10 4. What is the process of burning fuel called? <ol style="list-style-type: none"> a) Respiration

	<p>b) Combustion c) Photosynthesis d) Decomposition</p> <p>5. Which planet is known as the "Red Planet"?</p> <p>a) Earth b) Mars c) Jupiter d) Saturn</p> <p>*Short Questions (5)*</p> <p>1. What is air pollution? 2. Name two types of fuels. 3. What is fossil fuels? 4. Why is the atmosphere important? 5. Name the planets in our Solar System in order.</p>
SOCIAL SCIENCE	<p>I. Tick the correct option:-</p> <p>1. Where is Hawa Mahal located?</p> <p>(a) Jaipur (b) Allahabad (c) Udaipur</p> <p>2. Loktak lake is famous for its--</p> <p>(a) Gardens (b) Orchids (c) Temples</p> <p>3. Blue colour in a map shows ----</p> <p>(a) Hills (b) Plain land (c) Water bodies</p> <p>4. Which is the busiest air route in India?</p>

(a) Delhi- Kolkata (b) Delhi - Chennai (c) Mumbai - Delhi

5. Which one is a social networking site ?

(a) Internet Explorer (b) Google (c) Twitter

II. Fill in the blanks:-

1. India believes in the policy of -----.

2. ----- is similar to private messaging through Internet.

3. Vehicles cannot run without -----.

4. Day and night on the Earth are caused by the ----- of the Earth.

5. Mysore is a historical city of -----.

III. Answer the following questions:-

1. What do the Rajasthanis celebrate life with?

2. List two important features of Fatehpur Sikri.

3. Name two different types of maps.

4. Name two renewable sources of energy.

5. List two disadvantages of modern means of communication.

SANSKRIT

1. पांच फल तथा पांच सब्जी का नाम संस्कृत में लिखें।
2. कथाम् क्रमानुसारम् योजयन्तु (कथा को क्रम से जोड़िए)
(क) एकः शवरः आगच्छति।
(ख) हरिणः घासम् खादति।
(ग) हरिणः दूरे धावति।
(घ) अहम् हरिणम् पालयामि।
(ङ) बालकः शवरम् कथयति।
(च) शवरः हरिणम् न मारयति।
3. बालक एवं लता का शब्द रूप लिखे
4. बहुवचने परिवर्तयत (बहुवचन में परिवर्तन कीजिए)-
पदानि – बहुवचनं
(क) हरिणः – ____
(ख) भ्रमति – ____
(ग) आगच्छति – ____
(घ) वृक्षस्य – ____
(ङ) बालकः – ____
(च) शवरम् – ____
(छ) खादति – ____

DAV PUBLIC SCHOOL, PATLIPUTRA COLONY, PATNA-13

HOLIDAY ASSIGNMENT -2025-26

Class - VI

WINTER VACATION

ENGLISH

Change the tense as directed.

- a) She writes a letter. (Change into Past Tense)
- b) They played football. (Change into Present Tense)
- c) I will visit my aunt. (Change into Past Tense)
- d) He eats an apple. (Change into Future Tense)

Rewrite using a suitable modal.

- a) It is necessary to follow the rules.
- b) It is possible that he is late.
- c) I am able to speak English.

Fill in the blanks with suitable determiners

- a) ___ cat is sleeping on the sofa.

b)I don't have ____ time to finish the work.

c)She bought ____ apples from the market.

c)____ honest man is respected by all.

d)There are ____ students waiting.

Writing section:

1.You are the Head Boy / Head Girl of your school. Write a notice informing students about an Inter-House Sports Competition.

2.Write a letter to the editor of a local newspaper about the problem of garbage on the streets in your area.

Answer these questions.

1. Why was Rupa suddenly asked to play the role of Hanuman?

2.Why was Ranga fed up with Attila?

3.Why did Attila run after Ranga ?What did others conclude from his chase?

4.How did Gilchrist decide to skip the examination?

5.Bring out the contrast between the beginning and the ending of the poem?

6.How did the young man finally conquer the Princess?

7. What made Gandhiji feel ashamed of himself during his visit to South Africa?

HINDI

1. दिए गए मुहावरों का अर्थ लिखें।
क. घी के दिए जलाना।
ख. नाक में दम करना।
ग. हाथ बटाना।
घ. मन में लड़झ फूटना।
2. दिए गए शब्दों के वचन बदले।
क. रुपया
ख. मूर्ति
ग. भाषा
घ. खुशी
3. नीचे दिए गए शब्दों में से उपसर्ग और मूल शब्द अलग करें।
क. दुर्गुण
ख. प्रवेश
ग. संभव
घ. निर्मम
4. तीन दिनों की छुट्टी के लिए प्राचार्य को आवेदन पत्र लिखें।
5. जब सिकंदर साधु के पास पहुंचा तो उसने क्या देखा? सिकंदर और साधु की इस घटना को संवाद के रूप में लिखिए।
6. आपके विद्यालय में भाषण प्रतियोगिता का आयोजन किया जाना है। इस विषय पर एक सूचना लिखें।
7. नीचे दिए गए शब्दों के समान अर्थ वाले शब्द लिखें।
क. परिश्रम
ख. पथ
ग. सिंधु
घ. पुष्प
8. वसंत आने पर भंवरे और कोयल क्या करते हैं ?
9. मुसाफिर को किस यात्रा पर चलना पड़ेगा ?
10. कवि ने किसका गुणगान करने के लिए कहा है ?

MATHS

H.W.

Q1.Find the value of x, if

$$7x + 3 = 9$$

Q2.Evaluate:

a - 4b + 2, if a is equal to 2 and p is equal to 1

Q3.

There are 38 students in a class.

If x more students join the class, how many students are there in the class?

Q4.

The weight of 72 books is 9 kg.

a) Find the weight of 80 such books.

b) How many books will weigh 6 kg?

Q5.

Draw a circle of radius 4 cm.

Draw its longest chord and measure it.

Q6. Add:

$$(3x^2 + 5x - 2) \text{ and } (x^2 - 4x + 7)$$

.

SCIENCE

Science Question Paper

Class 6

Section A- Objective Question Paper: (1 × 6 = 6 marks)

Attempt all questions

Which of the following is an example of work being done?

- a) A boy standing still
- b) A girl pushing a wall that does not move
- c) A book kept on a table
- d) A boy lifting a bag

The ability to do work is called:

- a) Force
- b) Energy
- c) Power
- d) Motion

Which of the following is a source of light?

- a) Moon
- b) Mirror
- c) Sun
- d) Wall

The dark region formed behind an opaque object is called:

- a) Reflection
- b) Image
- c) Shadow
- d) Light beam

The path through which electric current flows is called a:

- a) Bulb
- b) Battery
- c) Circuit
- d) Switch

Which of the following materials allows electric current to pass through it easily?

- a) Plastic
- b) Rubber
- c) Wood
- d) Copper

Section B – Very Short Answer Questions: (2 × 4 = 8 marks)

Answer any four questions

What is work?

Name any two forms of energy.

What is an opaque object? Give one example.

What is an electric cell?

Write one difference between a conductor and an insulator.

Section C – Short Answer Questions: (3 × 2 = 6 marks)

Answer any two questions

Describe an activity to show the inter relationship between work and energy.

Describe how a shadow is formed. Write two conditions required for the formation of a shadow.

What is an electric circuit? Draw a simple labelled diagram of a closed electric circuit.

**SOCIAL
SCIENCE**

One Word Answer.

1.The realm of Land

2.Nams the dark continent.....

3.An Upland with rugged surface.....

4.A narrow Strip of Land that joins two large areas of Land....

5.The southmost tip of mainland of India is.....

6.World's second highest peak is.....

7.Biggest delta of the World is.....
8.Which river is the major tributary of Indus river.....
9.Who is known as Napoleon of India.....
10.Who was the last kushan ruler.....
Answer the following.
1.Who established gupta empire and when?
2.How was trade carried on in the Gupta period?
3.What are the main source of income of Municipal Corporation?
4.Write two functions of the gram panchayat?
5.Write two main function of gram sabha.

01. एतानि वाक्यानि 'शुद्धानि' अथवा 'अशुद्धानि' इति ववन्तु लिखन्तु च-

i. मातृतुल्यं मधुरं तु त्रैलोक्ये अपि चिज्जन न अस्ति।
उत्तरम्:
ii. मधुरवचनं सर्वदा कल्याणकारकं भवति।
उत्तरम्:
iii. परलोके धर्मः एव धनं भवति।
उत्तरम्:
iv. निद्रा सुखविनाशिका अस्ति।
उत्तरम्:
v. विद्यया सर्व वर्धते।
उत्तरम्:

SANSKRIT

2. एतेषां प्रश्नानाम्-उत्तराणि एकपदेन वदन्तु लिखन्तु च-

i. परलोके धनं किम् अस्ति?

उत्तरम्:

ii. शर्करा कीदृशी भवति?

उत्तरम्:

iii. मधुरेभ्यः अपि मधुरं किं भवति?

उत्तरम्:

iv. वीर्यं कया वर्धते?

उत्तरम्:

v. व्यसनेषु धनं किम् अस्ति?

उत्तरम्:

03. कोष्ठकात् उचितं सङ्ख्यापदं चित्वा रिक्तस्थानानि पूरयन्तु-

i. प्रकोष्ठे _____ व्यजनम् अस्ति। (एकः/एकम्)

ii. तत्र _____ बालकाः पठन्ति। (चत्वारः/चतस्रः)

iii. क्रीडाक्षेत्रे _____ क्रीडकाः सन्ति। (द्वादशाः/द्वादश)

iv. शिवस्य _____ नेत्राणि भवन्ति। (त्रीणि/त्रयः)

v. पुराणानि _____ सन्ति। (अष्टादश/अष्टादशानि)

04. विपरीतार्थकं पदं लिखन्तु-

i. तादृशम् -

ii. गृहीत्वा -

iii. बहिः -

iv. पश्चात् -

v. गत्वा -

DAV PUBLIC SCHOOL, PATLIPUTRA COLONY, PATNA-13

Holiday Home Work -2025-26

Class - VII

WINTER BREAK

ENGLISH

1. As the Secretary of the Eco Club of your school, write a notice for the school notice board informing students about a "Tree Plantation Drive" to be held on Saturday.
2. Write a letter to the Editor of a local daily expressing concern over the growing menace of stray dogs in your colony.
3. Fill in the blanks:
 - (a) I saw _____ one-eyed man yesterday.
 - (b) _____ moon shines at night.
 - (c) He is _____ honest officer.
4. Change the following sentences into Passive Voice:
 - (a) The boy broke the window.
 - (b) She is singing a song.
 - (c) They have completed the work.
5. Re-arrange the following words to make meaningful sentences:
 - (a) exercise / for / health / good / is / walking.
 - (b) school / goes / everyday / he / to.
6. Fill in the blanks with appropriate Modals:
 - (a) You _____ follow the traffic rules. (Obligation)
 - (b) _____ I come in, sir? (Permission)
7. Read the extract and answer the questions:

"Will you step into my parlour?" said the spider to the fly,
"Tis the prettiest little parlour that ever you did spy."

	<p>(a) Name the poem and the poet. (b) Why does the spider call the fly? (c) What figure of speech is used in "prettiest little parlour"? Answer any four of the following questions in 30–40 words (a) Why did Grandfather buy Tutu? (Monkey Trouble) (b) How did Manju's father react to her painting? (Fight, Manju, Fight!) (c) What was the specialty of Ram Singh-070? (The Human Robot) (d) Why did Swami feel that his father's proposition was "frightful"? (A Hero)</p>
HINDI	<p>1. इन शब्दों के विलोम शब्द लिखिए तिमिर स्वार्थ तरल अनुकूल 2. इन शब्दों के लिंग बदलिए लेखक सहपाठी अभिनेता विधवा 3. वाक्यों से क्रिया विशेषण के भेदों के नाम लिखिए: पिताजी कल मुंबई जाएंगे। मैं बहुत सावधानी से लिखता हूँ। बच्चे बहुत शोर कर रहे हैं। दादाजी नीचे बैठ गए। 4. वाक्यांशों के लिए एक शब्द लिखिए कलाकार द्वारा बनाई गई वस्तु जो कठिनाई से समझ में आए जिसका मूल्य अधिक हो विशाल हृदय वाला 5. इन शब्दों में उपसर्ग और प्रत्यय लगाकर नए शब्द बनाइए स्वच्छ, ज्ञान, भाव, सत्र 6. पाँच दिनों की छुट्टी हेतु प्राचार्या को आवेदन पत्र लिखिए। 7. विद्यालय परिसर से आपकी साइकिल चोरी हो गई है। इसके लिए एक सूचना बनाइए।</p>

	<p>8. 'कर्म ही पूजा है' इस विषय पर 100 शब्दों का अनुच्छेद लिखिए।</p> <p>9. प्रेरणार्थक क्रिया से चार वाक्य बनाइए।</p> <p>10. निम्नलिखित प्रश्नों के उत्तर लिखिए</p> <ol style="list-style-type: none"> 1. प्रकृति समय के अनुसार चलती है ? स्पष्ट कीजिए। 2. संसार के सबसे ऊँचे पर्वत शिखर को किस किस नाम से पुकारा जाता है? 3. बुढ़िया के घर से लौटते समय लेखक ने क्या प्रण लिया ? 4. अपनी समर्थ के अनुसार कार्य करने से क्या लाभ होता है? 5. किसान को मानवता का मसीहा क्यों कहा गया है?
MATHS	<p>1. Find the value of x so that $(\frac{3}{4})^{2x+1} = (\frac{3}{4})^9$</p> <p>2. In $\triangle ABC$, $\angle B = 44^\circ$, if $AB = BC$, find $\angle A$ and $\angle C$</p> <p>3. Find the diagonal of a rectangle whose sides are 15m and 8m.</p> <p>4. The right angle is isosceles, if the square of hypotenuse is $50m^2$. What is the length of each of its side.</p> <p>5. Find the product of $(7P - 3Q)(2P - 5Q)$</p> <p>6. The sum of two numbers is 99. If one exceeds the other by 9, find the numbers.</p> <p>7. Simplify : $(\frac{1}{2})^{-2} + (\frac{1}{3})^{-2} + (\frac{1}{4})^{-2}$</p> <p>8. Factorise (a) $4(p+q)(3a-b) + 6(p+q)(2b-3a)$ (b) $ab^2 - bc^2 - ab + c^2$</p>
SCIENCE	<p style="text-align: right;">Class - 7</p> <p style="text-align: right;">Topics:</p> <p>Nutrition in Living Organisms Reproduction in Plants Motion and Time Electric Current and its Effects</p> <p>Time: 40 minutes Maximum Marks: 20</p> <p>Section A – Objective Type Questions: (1 × 6 = 6 marks)</p> <p>Attempt all questions</p> <p>The process by which green plants prepare their own food is called:</p> <ol style="list-style-type: none"> a) Respiration b) Digestion c) Photosynthesis d) Transpiration

Which of the following is an asexual method of reproduction in plants?

- a) Pollination**
- b) Fertilisation**
- c) Seed formation**
- d) Budding**

The SI unit of speed is:

- a) km/h**
- b) m/s**
- c) cm/s**
- d) m/min**

The device used to open and close an electric circuit is called a:

- a) Bulb**
- b) Battery**
- c) Switch**
- d) Fuse**

Which nutrient is mainly responsible for body building?

- a) Carbohydrates**
- b) Vitamins**
- c) Proteins**
- d) Minerals**

When an electric current flows through a wire, the wire becomes:

- a) Cold**
- b) Magnetised**
- c) Heated**
- d) Broken**

Section B – Very Short Answer Questions: (2 × 4 = 8 marks)

Answer any four questions

Name any two modes of nutrition in living organisms.

What is pollination?

Define uniform motion.

	<p>Write one use of an electric fuse. Name any two nutrients obtained from food. Section C – Short Answer Questions: (3 × 2 = 6 marks) Answer any two questions Explain photosynthesis with a word equation. Describe vegetative propagation with one suitable example. What is the principle on which electric bell works? Draw a simple labelled diagram of Electric Bell .</p>
<div>SOCIAL SCIENCE</div>	<p>One Word Answer.</p> <ol style="list-style-type: none"> 1.The temperate grass land of North America are called..... 2.The living zone of the planet Earth is known as..... <u>3</u>.The Taiga vegetation is also known as..... 4.Din-i-Ilahi was started by..... 5.who was the last mughal empire..... 6.Mughal empire was founded by..... 7.Humayun was defeated by..... 8.Johannes Gutenberg belong to which country..... 9.The right to information act was passed in which year..... 10.The upper house in state is called..... <p>Answer the following.</p> <ol style="list-style-type: none"> 1.Write three functions of state legislature.

2.Why media is called watch dog of democracy?

3.What do you mean by consumerism?

4.Explain the Mansabdari system?

5.State main features of jahangir's rule.

SANSKRIT

1. मञ्जूषायां प्रदत्तैः उचितपदैः पत्रम् पूरयन्तु-

(मञ्जूषा- विद्यालयम्, ज्वरेण, मान्याः, निवेदयामि, भवताम्, अवकाशं)

सेवायाम्,

i. _____ प्रधानाचार्याः

डी.एवी. विद्यालयः

दिल्लीनगरम्।

महोदयाः

सविनयं ii. _____ यत् गत् रात्रेः अहं iii. _____ ग्रस्तः अस्मि। अस्मात् कारणात् अहं _____ iv. _____ आगन्तुम् असमर्थः

अस्मि। अतः दिनद्वयं v. _____ दत्वा माम् अनुगृह्णन्तु।

धन्यवादाः

vi. _____ शिष्यः

सूर्यः

कक्षा-सप्तमी

2. कोष्ठकात् उचितं सङ्ख्यापदं चित्वा रिक्तस्थानानि पूरयन्तु-

i. गृहे _____ नरौ स्तः। (द्वौ/द्वे)

ii. तत्र _____ जनाः भ्रमन्ति। (पञ्चाः/पञ्च)

iii. _____ शिक्षकः पाठयति। (एका/एकः)

iv. _____ मित्राणि क्रीडन्ति। (चत्वारः/चत्वारि)

v. _____ गायिका गीतं गायति। (एका/एकः)

- vi. _____ धेनवः चरिन्त। (चतस्रः/चत्वारः)
vii. मनुष्यस्य _____ पादौ भवतः। (द्वे/द्वौ)
viii. सूर्यः _____ अस्ति। (एकः/एका)
ix. _____ कन्याः पठन्ति। (सप्ताः/सप्त)
x. _____ पुष्पाणि विकसन्ति। (दशानि/दश)
3. लिखन्तु वदन्तु च 'आम' अथवा 'न'-
i. किं गुणः सौन्दर्यस्य आभूषणं भवति?
ii. किं स्वर्णस्य आभूषणम् एव श्रेष्ठं भवति?
iii. किं परिश्रमेण कार्यस्य फलं प्राप्तं भवति?
iv. किं बुद्धिमान् एव शस्त्रस्य लाभं प्राप्नोति?
v. किम् एकेन हस्तेन तालिकावादनं भवति? –